

1. Write in the missing numbers.



$$\square + 75 = 90$$

$$4 \times \square = 200$$

2. Write in the missing numbers.



$$\square + 85 = 200$$

$$4 \times \square = 120$$

$$120 - 51 = \square$$

3. Write in the missing numbers.



$$55 + \square = 120$$

$$600 \times 4 = \square$$

4. Write in the missing number.



$$50 \div \square = 2.5$$

5. Write in the missing numbers.



$$5 \times 70 = \square$$

$$4 \times \square = 200$$

6. Write in the **missing** numbers.




$$(3 \times 4) + \square = 19$$



$$(5 \times 5) - \square = 23$$

7. Write in the missing numbers.

 $45 + \square = 110$

$$(4 \times 5) - \square = 12$$


$$60 \times 3 = \square$$

8. Write in the **missing** numbers.

 $150 + \square = 500$

 $172 - \square = 60$

9. Write in the missing numbers in this multiplication grid.



×	5	<input type="text"/>	<input type="text"/>
4	20	36	32
<input type="text"/>	35	63	56
<input type="text"/>	30	54	48

10. Write in the missing digits to make this correct.




$$\begin{array}{r} \square 4 \square \\ \times \quad 6 \\ \hline 2052 \end{array}$$

11. Write in the missing digits.


$$\begin{array}{|c|c|c|} \hline 4 & \square & 4 \\ \hline \end{array} + \begin{array}{|c|c|c|} \hline 3 & 8 & \square \\ \hline \end{array} = \begin{array}{|c|c|c|} \hline 8 & 5 & 1 \\ \hline \end{array}$$

12. Write in the **two** missing digits.


$$\begin{array}{|c|c|} \hline \square & 0 \\ \hline \end{array} \times \begin{array}{|c|c|} \hline \square & 0 \\ \hline \end{array} = \begin{array}{|c|c|c|c|} \hline 3 & 0 & 0 & 0 \\ \hline \end{array}$$