


1. Emily makes 250 grams of a snack mixture.  
15% of the weight is raisins, 25% is banana chips  
and the rest is peanuts.

How many grams of **peanuts** does she use?



Show  
your **working**.  
You may get  
a mark.

**g**

2. Calculate **5%** of **£3600**




£ .....

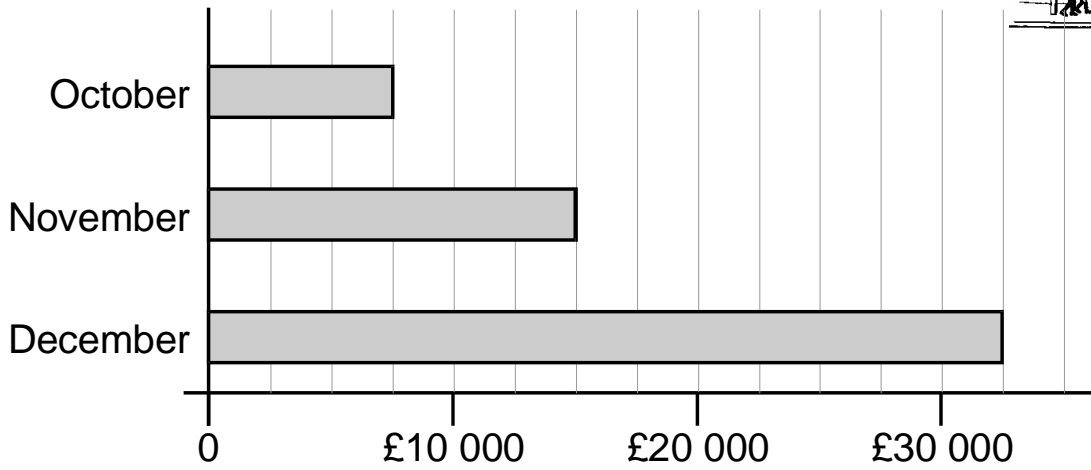
3. Calculate **15%** of **460**



£ .....



4. This chart shows the amount of money spent in a toy shop in three months.



Stepan says,

***'In November there was a 100% increase on the money spent in October.'***

Is he correct?

Circle Yes or No.

 **Yes / No**

Explain how you can tell from the chart.



.....

.....

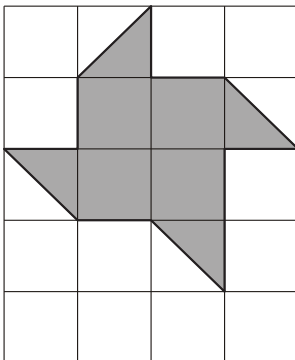
.....

5. Here is a grid of 20 squares.

What percentage of the grid is shaded?



.....%



6. Here is a pattern on a grid.

What percentage of the grid is shaded?



.....%

